

Link to web Nopadol.com

[illegible]

--	--	--	--	--	--

[illegible]

200 (7)

[illegible][illegible][illegible]

- 8.00 – 17.00

□ .

[illegible][illegible]

-

[illegible][illegible]

A visual representation of base ten blocks. On the left is a large square representing 100, composed of a 10x10 grid of smaller squares. In the middle is a vertical rod representing 10, composed of 10 smaller cubes. On the right is a small cube representing 1, composed of 1 smaller cube. The number 100 is written below the large square, 10 below the rod, and 1 below the small cube.

-

 15

[illegible]

300

--	--	--	--	--	--	--	--

500 

- [illegible]

- 

[illegible]

A visual representation of the number 20 using ten blocks of size 10 and two blocks of size 1.

1.

[illegible][illegible]



--	--	--	--

Google Map ☐ ☐ ☐ ☐ ☐ ☐

km 27

km 30

EXpress



















-  

	<div>15 /</div>		
	<div>10 /</div>		
3		<div>10</div>	<div>10</div>
		<div>11-20</div>	<div>10</div>
		<div>20 30</div>	<div>15</div>
		<div>2</div>	<div>12</div>
		<div>(60*60 2)</div>	<div>15</div>
4	/	<div>10</div>	<div>10</div>
		<div>11-20</div>	<div>10</div>
		<div>20 30</div>	<div>15</div>
		<div>2</div>	<div>20</div>
		<div>2</div>	<div>30</div>
5		<div>10</div>	<div>10</div>
		<div>11-20</div>	<div>25</div>

[illegible]

???????? ???
 ???

????????????????

1.   ( ,
 ,  , 
  **20kg** 
○   6 

  3  (






???????? link ????????

????????????? link ??????????????

Do Home link Do Home


????????? link ??????????



Delivery Fee (Baht)	Radiys Distance (km.)	ExtraDistance Rate (Baht / km.)
100	15	10



2.   




Delivery Fee (Baht) Radiys Distance (km.) ExtraDistance Rate (Baht / km.)



200 15 20

1.  _____

 6 

 5 

 4  

 5 

Revision #30

Created 17 October 2022 04:07:05 by H.Yong

Updated 30 October 2024 08:38:44 by H.Yong