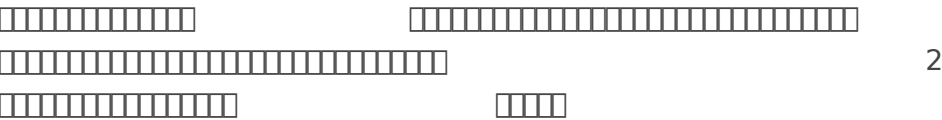


1.2) ?????????????????

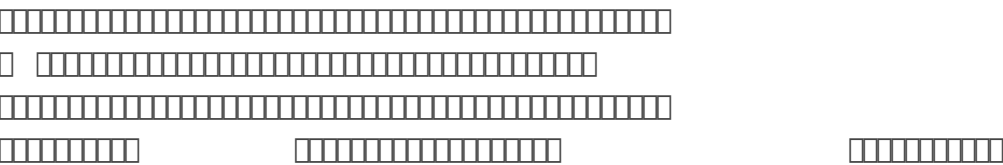


-
-

image-1659762363735.png



1.3) ?????????????????



-
-
-
-

10

9

8

7

6

5

4

3

2

1

-
- Diagram illustrating the relationship between the number of boxes and the number of negative boxes. The top bar is the longest, followed by the bottom bar, and then the middle bar. To the right of the top bar is a small group of four boxes. To the right of the bottom bar is the text "Negative" followed by a group of four boxes.

-

- ## 2. ???????????

2.1) ?????????????????????






2.2) ?????????????????????

2.3) ?????????????????

[illegible][illegible]

--	--	--	--	--	--	--	--

--	--	--	--

- 
- 
- 
- 
- 

Revision #1

Created 6 August 2022 04:57:17 by

Updated 6 August 2022 05:09:21 by [REDACTED]