










ST-WH-005

????????????????????????????????
 ?????????????????????????????????
 ?????????????????????

1. ???????????

	/	

2. ??????



 6 , 10 ,   ( )

3. ???

-
-
-

4. ?????????????????

4.1 ?????????

-
-

? Checklist ??????????????????????

? 1 ??????????

The diagram illustrates the merge sort algorithm. It shows an array of 16 elements being recursively split into two halves of 8 elements each. The left half is further split into two halves of 4 elements each, and the right half is split into two halves of 4 elements each. The process continues until the array is fully sorted.

? 2 ??????????????????????

? 3 ??????????????

? 4. ????????????????? (?????)

? 5. ?????????????????

Revision #3

Created 30 May 2025 08:38:41 by

Updated 31 May 2025 02:37:04 by